

Worksheet 4.1 Relations and Functions

Relations Expressed as Ordered Pairs

Determine if the following relations are functions. Then state the domain and range.

1. $\{(1, -2), (-2, 0), (-1, 2), (1, 3)\}$

Function: _____

Domain: _____

Range: _____

2. $\{(1, 1), (2, 2), (3, 5), (4, 10), (5, 15)\}$

Function: _____

Domain: _____

Range: _____

3. $\left\{\left(17, \frac{15}{4}\right), \left(\frac{15}{4}, 17\right), \left(15, \frac{17}{4}\right), \left(\frac{17}{4}, 15\right)\right\}$

Function: _____

Domain: _____

Range: _____

4. $\left\{\left(-3, \frac{2}{5}\right), \left(-3, \frac{3}{5}\right), \left(\frac{3}{2}, -5\right), \left(5, \frac{2}{5}\right)\right\}$

Function: _____

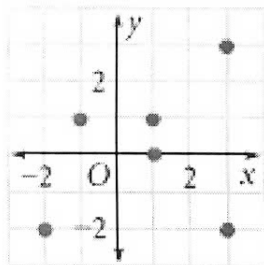
Domain: _____

Range: _____

Relations Expressed as Graphing

Write each of the following as a relation, state the domain and range, then determine if it is a function.

5.



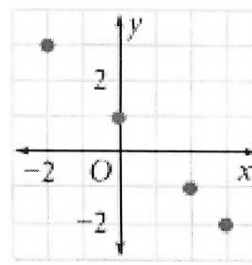
Relation: _____

Domain: _____

Range: _____

Function: _____

6.



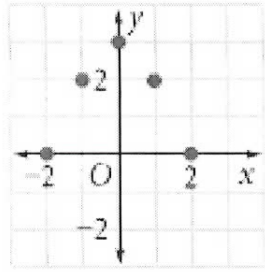
Relation: _____

Domain: _____

Range: _____

Function: _____

7.



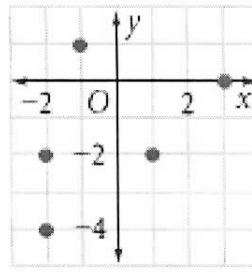
Relation: _____

Domain: _____

Range: _____

Function: _____

8.



Relation: _____

Domain: _____

Range: _____

Function: _____

Relations Expressed as Mappings

Express the following relations as a mapping, state the domain and range, then determine if is a function.

9. $\{(-2, -1), (0, 3), (5, 4), (-2, 3)\}$

10. $\{(-1, 5), (0, 3), (2, 3), (3, -1)\}$

Domain: _____

Domain: _____

Range: _____

Range: _____

Function: _____

Function: _____

11. $\{(-1, 7), (0, -3), (1, 10), (0, 7)\}$

12. $\left\{\left(\frac{1}{2}, 2\right), \left(\frac{1}{4}, 2\right), \left(\frac{1}{8}, 2\right), \left(\frac{-1}{2}, 2\right)\right\}$

Domain: _____

Domain: _____

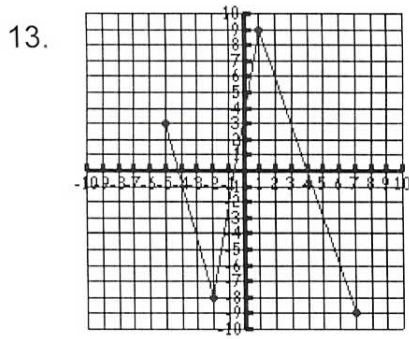
Range: _____

Range: _____

Function: _____

Function: _____

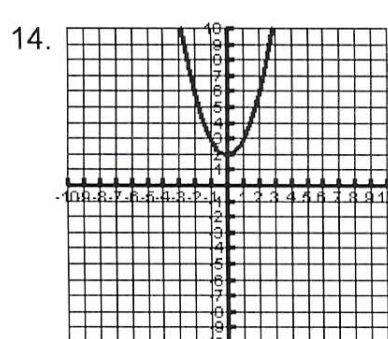
Determine if the graph is a function, then state the domain and range.



Domain: _____

Range: _____

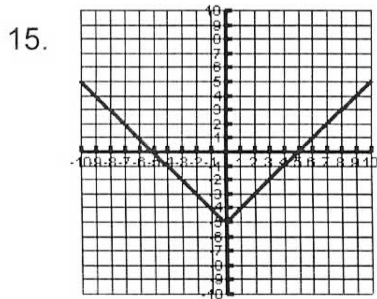
Function: _____



Domain: _____

Range: _____

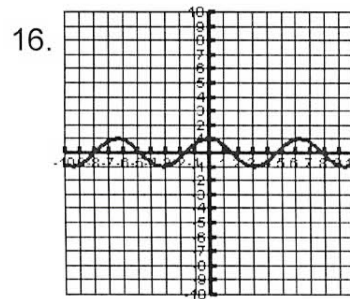
Function: _____



Domain: _____

Range: _____

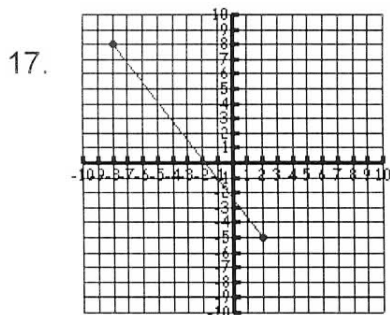
Function: _____



Domain: _____

Range: _____

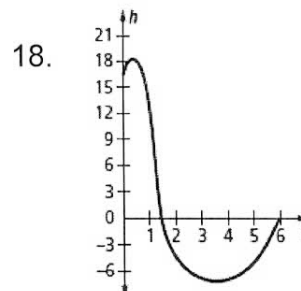
Function: _____



Domain: _____

Range: _____

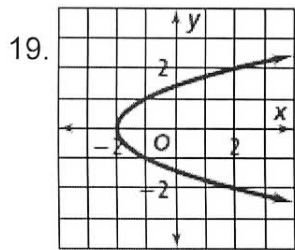
Function: _____



Domain: _____

Range: _____

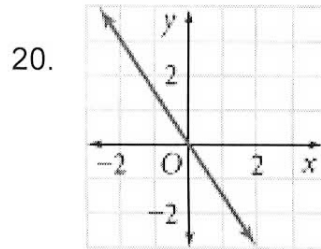
Function: _____



D: _____

R: _____

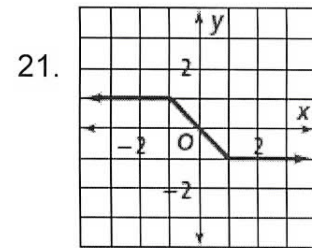
F: _____



D: _____

R: _____

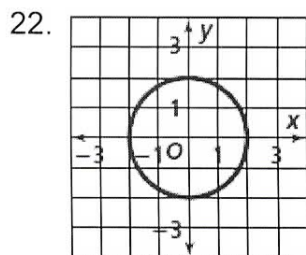
F: _____



D: _____

R: _____

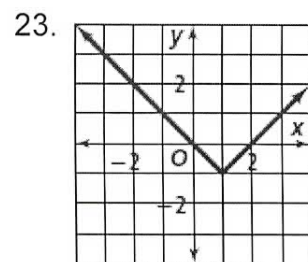
F: _____



D: _____

R: _____

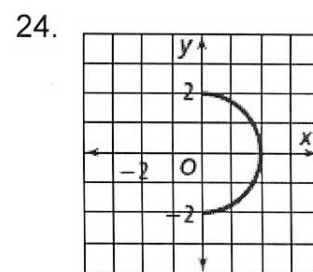
F: _____



D: _____

R: _____

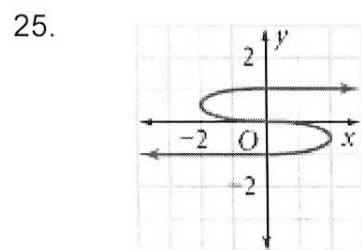
F: _____



D: _____

R: _____

F: _____



Domain: _____

Range: _____

Function: _____